

Name \_\_\_\_\_



**TEKS** Number and  
Operations—K.3.B

**MATHEMATICAL PROCESSES**  
K.1.E

# 14.2 Differences Within 9



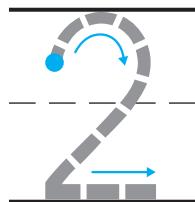
## Essential Question

How can you show differences within 9?

### Explore



— — —



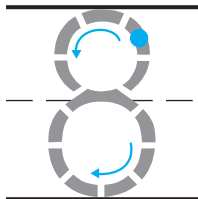
— — —  
— — —

\_\_\_\_\_  
\_\_\_\_\_  
\_\_\_\_\_

**DIRECTIONS** There are nine cars. Two cars drive away. Trace the circle and X around those cars. How many cars are left? Trace and write to complete the subtraction sentence.

# Share and Show

1



— — —

\_\_\_\_\_

\_\_\_\_\_

\_\_\_\_\_

— — — — —

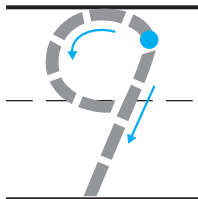
— — — — —

\_\_\_\_\_

\_\_\_\_\_

\_\_\_\_\_

2



— — —

\_\_\_\_\_

\_\_\_\_\_

\_\_\_\_\_

— — — — —

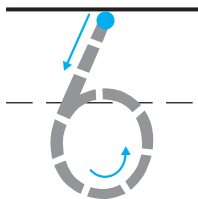
— — — — —

\_\_\_\_\_

\_\_\_\_\_

\_\_\_\_\_

3



— — —

\_\_\_\_\_

\_\_\_\_\_

\_\_\_\_\_

— — — — —

— — — — —

\_\_\_\_\_

\_\_\_\_\_

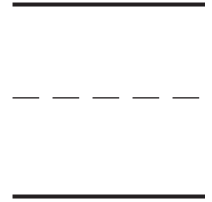
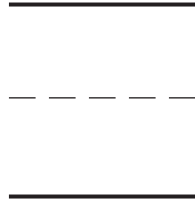
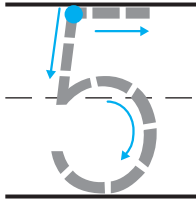
\_\_\_\_\_

**DIRECTIONS** 1. Listen to the subtraction word problem. How many buses drive away? Trace the circle and X. How many buses are left? Trace and write to complete the subtraction sentence. 2-3. Listen to the subtraction word problem. Trace and write to complete the subtraction sentence.

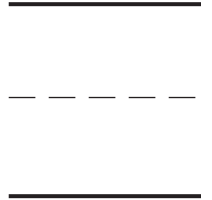
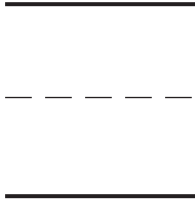
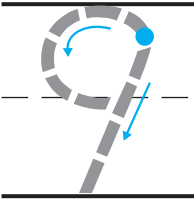
476 four hundred seventy-six

Name \_\_\_\_\_

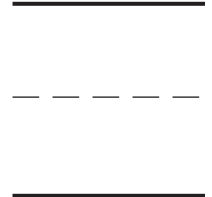
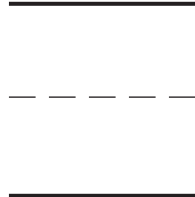
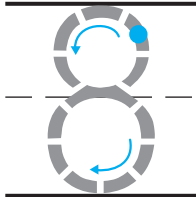
4



5



6



**DIRECTIONS** 4–6. Listen to the subtraction word problem.  
Trace and write to complete the subtraction sentence.





## Problem Solving

7



$$8 - 6 = \underline{\quad\quad}$$

## Daily Assessment Task

8



☐ 7

☐ 8

**DIRECTIONS** 7. Complete the subtraction sentence. Draw to show what you know about this subtraction sentence. Tell a friend about your drawing. 8. Choose the correct answer. There are nine mail trucks. One mail truck drives away. What is  $9 - 1$ ?

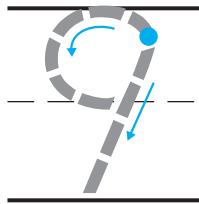

**478** four hundred seventy-eight



Name \_\_\_\_\_

## 14.2 Differences Within 9

1



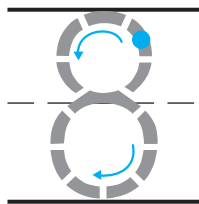

---

\_\_\_\_\_  
\_\_\_\_\_  
\_\_\_\_\_

---  
---

\_\_\_\_\_  
\_\_\_\_\_  
\_\_\_\_\_

2



---

\_\_\_\_\_  
\_\_\_\_\_  
\_\_\_\_\_

---  
---

\_\_\_\_\_  
\_\_\_\_\_  
\_\_\_\_\_

**DIRECTIONS** Trace and write to complete the subtraction sentence. **1.** There are nine motorcycles. Four motorcycles drive away. Trace the circle and X. How many motorcycles are left? **2.** There are eight bicycles. Four bicycles ride away. How many bicycles are left?

3



☐ 8

☐ 6

4



☐ 3

☐ 9

5



☐ 5

☐ 4

**DIRECTIONS** Choose the correct answer.  
**3.** There are seven dump trucks. One dump truck drives away. What is  $7 - 1$ ? **4.** There are nine airplanes. Six airplanes fly away. What is  $9 - 6$ ?  
**5.** There are eight sailboats. Four boats sail away. What is  $8 - 4$ ?